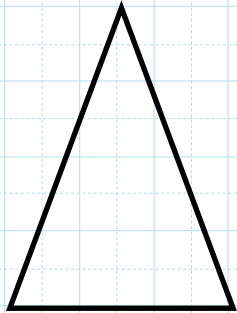


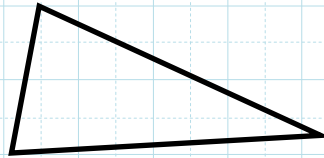
二等辺三角形と正三角形①

名前()) 😊 __月__日()

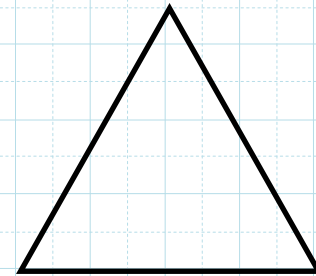
●二等辺三角形、正三角形はどれですか。()に書きましよう。



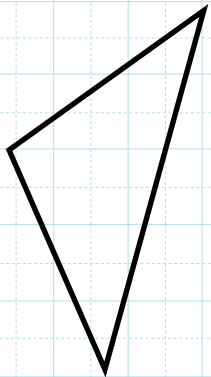
① ()



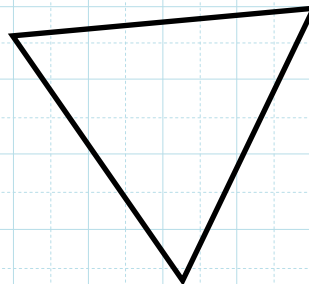
② ()



③ ()



④ ()

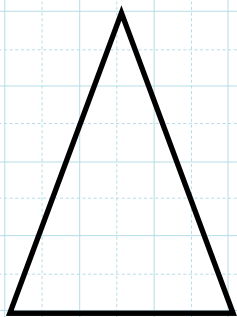


⑤ ()

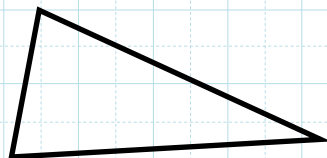
3つの辺の長さを、ものさし
ではかって、調べてみよう。

二等辺三角形と正三角形①【解答】

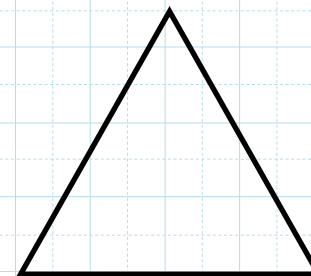
●二等辺三角形、正三角形はどれですか。()に書きましよう。




① (二等辺三角形)



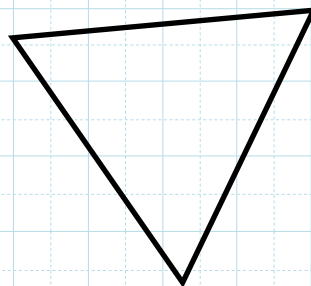
② (二等辺三角形)



③ (正三角形)



④ (二等辺三角形)



⑤ (正三角形)